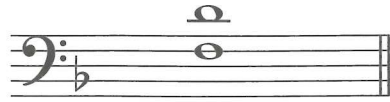



Above each note write a **higher** note to form the named **harmonic** interval within the key of F major. The first answer is given.


10



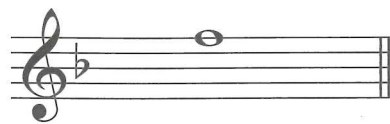
6th



3rd




8th/8ve



4th




7th



5th

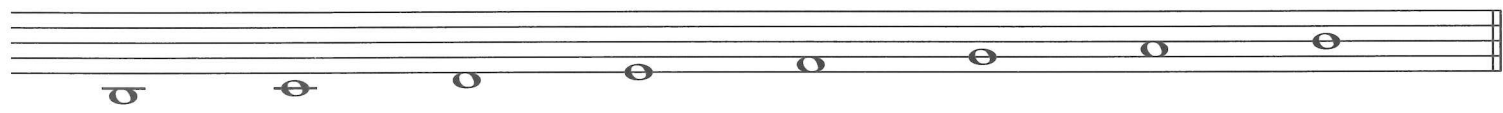
Add the correct clef and any necessary accidentals to make each of the scales named below. Do **not** use key signatures.

10



E minor


Which form of the minor scale have you used?



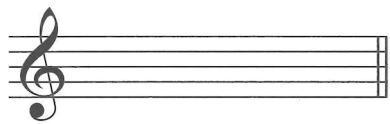
D major

Name each key as shown by its key signature. The first answer is given.

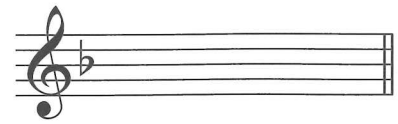
10



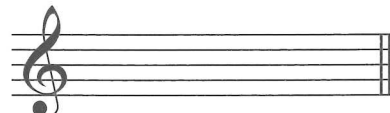
A major




..... major




..... minor



..... minor



..... major



..... major